


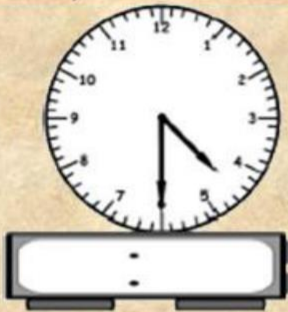
Elapsed Time - 3



Lesson 3 Name _____


1. Figure out the time for each problem below
2. Scan in the QR Code to check your answers

1) Billy went out to play Billy came home.




How much time
has passed

2) Sam went to the Library Came home.



How much time
has passed

3) Football practice Started Ended



How much time
has passed
