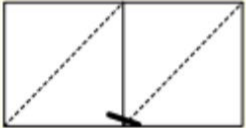










# Lattice Multiplication 2 X 1



Lesson 1 Name \_\_\_\_\_

1. Complete the lessons listed below
2. When finished scan in the QR code to see if you are correct.

1) $52 \times 7$ 5 2  7 $52 \times 7 = \underline{\hspace{2cm}}$	2) $81 \times 9$ 8 1  9 $81 \times 9 = \underline{\hspace{2cm}}$	3) $64 \times 8$ 6 4  8 $64 \times 8 = \underline{\hspace{2cm}}$
4) $13 \times 5$ 1 3  5 $13 \times 5 = \underline{\hspace{2cm}}$	5) $96 \times 4$ 9 6  4 $96 \times 4 = \underline{\hspace{2cm}}$	6) $28 \times 6$ 2 8  6 $28 \times 6 = \underline{\hspace{2cm}}$
7) $49 \times 3$ 4 9  3 $49 \times 3 = \underline{\hspace{2cm}}$	8) $78 \times 7$ 7 8  7 $78 \times 7 = \underline{\hspace{2cm}}$	9) $99 \times 2$ 9 9  2 $99 \times 2 = \underline{\hspace{2cm}}$