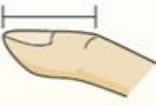

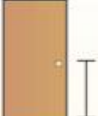












Estimating Distance



Lesson 1 Name _____

- Determine which measurement is logical
- Place the letter next to the number
- Scan in the QR code when you are finished

Inch (in)	Foot (ft)	Yard (yd)	Mile (mi)
An inch is about the distance of the last joint of your finger.	A foot is 12 inches. The length of a ruler.	1 yard is the same as 3 feet. From the floor to a door knob is about 1 yard.	A mile is 5,280 feet. Most major roads are at least a mile long.
			

 1) Screw A. 8 inches B. 10 inches C. 1 inch D. 1 yard	 2) Key A. 6 inches B. 5 feet C. 2 yards D. 2 inches	 3) Dog A. 4 inches B. 2 yards C. 2 feet D. 4 yards
 4) Strawberry A. 2 inches B. 10 inches C. 1 yard D. 6 inches	 5) Can of Soda A. 1 yard B. 1 inch C. 4 inches D. 1 foot	 6) 2 Liter of Soda A. 1 mile B. 1 inch C. 1 foot D. 6 Yards
 7) Refrigerator A. 4 yards B. 12 inches C. 6 feet D. 1 foot	 8) Bandage A. 3 inches B. 1 yard C. 2 feet D. 2 miles	 9) Mountain A. 2 miles B. 10 Yards C. 300 inches D. 20 feet

1. _____
2. _____
3. _____
4. _____
5. _____
6. _____
7. _____
8. _____
9. _____