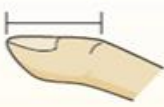

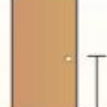











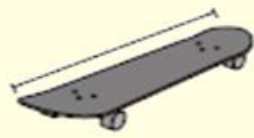
Estimating Distance



Lesson 2 Name _____

- Determine which measurement is logical
- Place the letter next to the number
- Scan in the QR code when you are finished

Inch (in)	Foot (ft)	Yard (yd)	Mile (mi)
An inch is about the distance of the last joint of your finger.	A foot is 12 inches. The length of a ruler.	1 yard is the same as 3 feet. From the floor to a door knob is about 1 yard.	A mile is 5,280 feet. Most major roads are at least a mile long.
			

 1) Can of Soda A. 1 inch B. 4 inches C. 1 yard D. 1 foot	 2) Key A. 2 inches B. 5 feet C. 6 inches D. 2 yards	 3) DVD A. 4 inches B. 1 foot C. 1 yard D. 12 inches
 4) Battery A. 2 feet B. 2 yards C. 2 Miles D. 2 inches	 5) Slice of Bread A. 2 yards B. 4 feet C. 10 inches D. 4 inches	 6) Dog A. 2 yards B. 2 feet C. 4 inches D. 4 yards
 7) Gallon of Milk A. 6 inches B. 3 inches C. 9 inches D. 11 feet	 8) Desk A. 11 inches B. 2 yards C. 2 feet D. 6 inches	 9) Skateboard A. 1 inch B. 12 inches C. 30 inches D. 2 yards

1. _____
2. _____
3. _____
4. _____
5. _____
6. _____
7. _____
8. _____
9. _____