










Multiplication 2 digits Name _____

- 1) Complete all 9 addition problems.
- 2) Show your work in the space provided.
- 3) Scan the QR code after you complete each answer to see if you got it correct.
- 4) Shade the small circle if you are correct. If not leave it blank.

$\begin{array}{r} 57 \\ \times 71 \\ \hline \end{array}$  <input type="checkbox"/>	$\begin{array}{r} 33 \\ \times 58 \\ \hline \end{array}$  <input type="checkbox"/>	$\begin{array}{r} 97 \\ \times 45 \\ \hline \end{array}$  <input type="checkbox"/>
--	--	--

$\begin{array}{r} 37 \\ \times 42 \\ \hline \end{array}$  <input type="checkbox"/>	$\begin{array}{r} 77 \\ \times 56 \\ \hline \end{array}$  <input type="checkbox"/>	$\begin{array}{r} 47 \\ \times 67 \\ \hline \end{array}$  <input type="checkbox"/>
--	--	--

$\begin{array}{r} 74 \\ \times 99 \\ \hline \end{array}$  <input type="checkbox"/>	$\begin{array}{r} 26 \\ \times 17 \\ \hline \end{array}$  <input type="checkbox"/>	$\begin{array}{r} 27 \\ \times 39 \\ \hline \end{array}$  <input type="checkbox"/>
--	--	--