

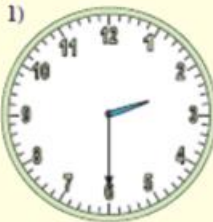


# Reading An Analog Clock




Lesson 1 Telling time




Name \_\_\_\_\_




Directions: Every half hour

1. Write the time for each clock in the space provided.
2. When finished scan in the QR code and see if you're correct.

1)  2)  3) 

4)  5)  6) 

7)  8)  9) 

10)  11)  12) 

1 \_\_\_\_\_

2 \_\_\_\_\_

3 \_\_\_\_\_

4 \_\_\_\_\_

5 \_\_\_\_\_

6 \_\_\_\_\_

7 \_\_\_\_\_

8 \_\_\_\_\_

9 \_\_\_\_\_

10 \_\_\_\_\_

11 \_\_\_\_\_

12 \_\_\_\_\_

