




Reading An Analog Clock




Lesson 2 Telling time




Name _____


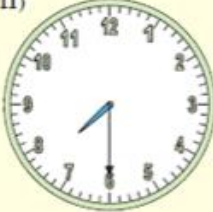
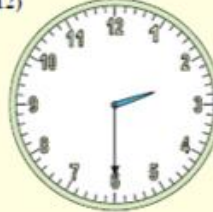
Directions: Every half hour

1. Write the time for each clock in the space provided.
2. When finished scan in the QR code and see if you're correct.

1)  2)  3) 

4)  5)  6) 

7)  8)  9) 

10)  11)  12) 

1 _____

2 _____

3 _____

4 _____

5 _____

6 _____

7 _____

8 _____

9 _____

10 _____

11 _____

12 _____

