

Area & Perimeter of Rectangles Lesson -1



Name _____


Directions: Find the area and perimeter of each rectangle.

1. Place the answer in the space provided.

2. When Finished Scan in the QR code to see if you are correct

Area Multiply
Two sides

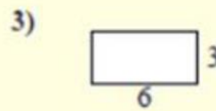
Perimeter
Add all sides
together



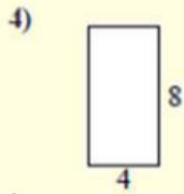
A _____
P _____



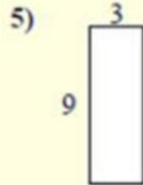
A _____
P _____



A _____
P _____



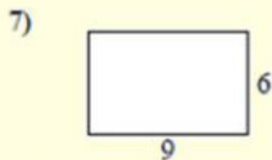
A _____
P _____



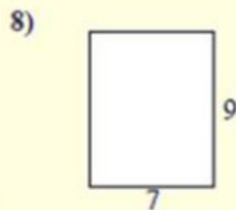
A _____
P _____




A _____
P _____



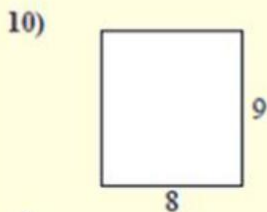
A _____
P _____



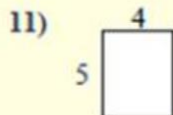
A _____
P _____




A _____
P _____



A _____
P _____



A _____
P _____



A _____
P _____