

Area & Perimeter-2

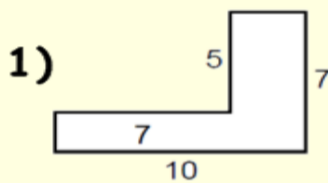
Compound Shape



Name _____

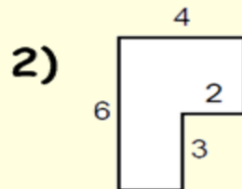
Directions: Find the area and perimeter of each rectangle.

1. Place the answer in the space provided.
2. Scan in the QR Code to check answers.



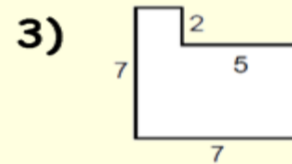
A = _____

P = _____



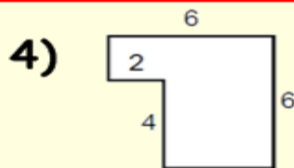
A = _____

P = _____




A = _____

P = _____



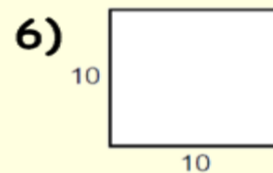
A = _____

P = _____



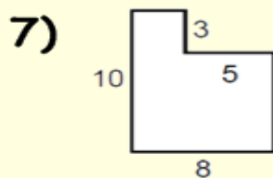
A = _____

P = _____



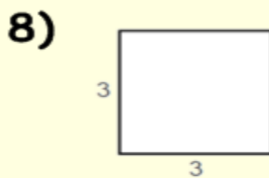
A = _____

P = _____




A = _____

P = _____



A = _____

P = _____



A = _____

P = _____