

Area & Perimeter - 3

Compound Shape

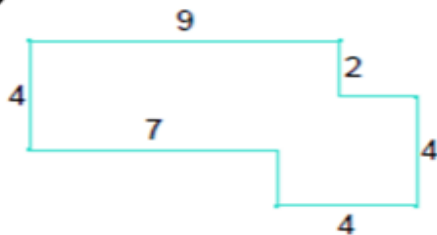


Name _____

Directions: Find the area and perimeter of each rectangle.

1. Place the answer in the space provided.
2. Scan in the QR Code to check answers.

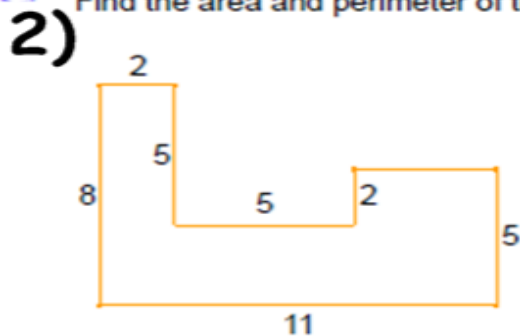
1) Find the area and perimeter of the shape.



$$A = \underline{\hspace{2cm}}$$

$$P = \underline{\hspace{2cm}}$$

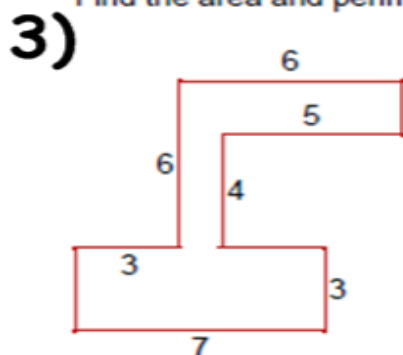
2) Find the area and perimeter of the shape.



$$A = \underline{\hspace{2cm}}$$

$$P = \underline{\hspace{2cm}}$$

3) Find the area and perimeter of the shape.



$$A = \underline{\hspace{2cm}}$$

$$P = \underline{\hspace{2cm}}$$