





Addition Lesson-3 Name _____



- 1) Solve the addition problems listed below.
- 2) Show your work in the space provided.
- 3) Scan the QR code after you complete each answer to see if you got it correct.

 + 
1 + 2 = _____

 + 
2 + 2 = _____

 + 
3 + 1 = _____

 + 
4 + 2 = _____