





Addition Lesson-3 Name _____




- 1) Solve the addition problems listed below.
- 2) Show your work in the space provided.
- 3) Scan the QR code after you complete each answer to see if you got it correct.

 +  + _____
1 + 2 = _____

 +  + _____
2 + 2 = _____

 +  + _____
3 + 1 = _____

 +  + _____
4 + 2 = _____