

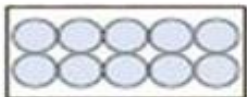





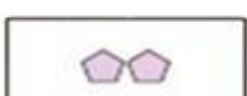


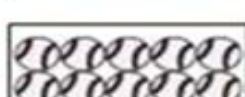










Addition Lesson-5 Name _____



- 1) Solve the addition problems listed below.
- 2) Place the letter of the correct photo next to the number .
- 3) Scan the QR code after you complete the page to see if you got it correct answers.

- 1) $6 + 3$
- 2) $3 + 10$
- 3) $4 + 5$
- 4) $2 + 8$
- 5) $8 + 2$
- 6) $5 + 8$
- 7) $8 + 7$
- 8) $10 + 1$
- 9) $1 + 6$
- 10) $1 + 10$

A.		-	
B.		-	
C.		-	
D.		-	
E.		-	
F.		-	
G.		-	
H.		-	
I.		-	
J.		-	

1.	_____
2.	_____
3.	_____
4.	_____
5.	_____
6.	_____
7.	_____
8.	_____
9.	_____
10.	_____