

# Addition Lesson-6 Name \_\_\_\_\_



- 1) Solve the addition problems listed below.
- 2) Place the letter of the correct photo next to the number .
- 3) Scan the QR code after you complete the page to see if you got it correct answers.

1)  $9 + 2$

2)  $2 + 6$

3)  $1 + 2$

4)  $1 + 6$

5)  $3 + 4$

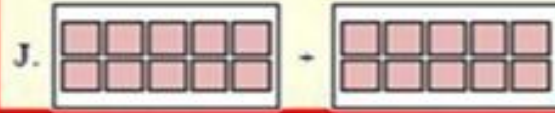
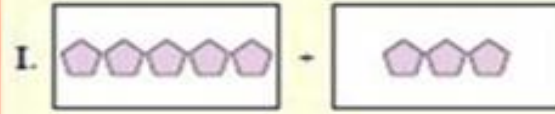

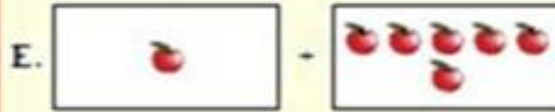
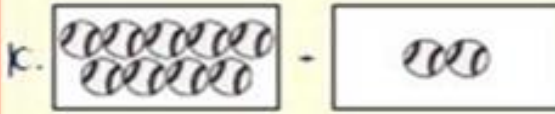
6)  $10 + 10$

7)  $5 + 3$

8)  $7 + 10$

9)  $2 + 2$

10)  $5 + 5$



1. \_\_\_\_\_

2. \_\_\_\_\_

3. \_\_\_\_\_

4. \_\_\_\_\_

5. \_\_\_\_\_

6. \_\_\_\_\_

7. \_\_\_\_\_

8. \_\_\_\_\_

9. \_\_\_\_\_

10. \_\_\_\_\_