

# Addition Lesson-6      Name \_\_\_\_\_



- 1) Solve the addition problems listed below.
- 2) Place the letter of the correct photo next to the number .
- 3) Scan the QR code after you complete the page to see if you got it correct answers.

1)  $9 + 2$

2)  $2 + 6$

3)  $1 + 2$

4)  $1 + 6$

5)  $3 + 4$

6)  $10 + 10$

7)  $5 + 3$

8)  $7 + 10$

9)  $2 + 2$

10)  $5 + 5$

A.



+




B.




+



C.



+



D.



+



E.



+



F.



+



G.



+



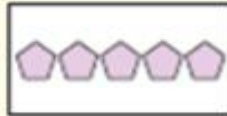
H.



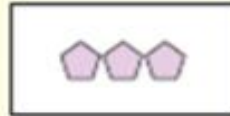
+



I.



+



J.



+



1. \_\_\_\_\_
2. \_\_\_\_\_
3. \_\_\_\_\_
4. \_\_\_\_\_
5. \_\_\_\_\_
6. \_\_\_\_\_
7. \_\_\_\_\_
8. \_\_\_\_\_
9. \_\_\_\_\_
10. \_\_\_\_\_