

Addition Lesson-7 Name _____



- 1) Solve the addition problems listed below.
- 2) Place the letter of the correct photo next to the number .
- 3) Scan the QR code after you complete the page to see if you got it correct answers.

1) $8 + 6 =$ _____

2) $4 + 1 =$ _____

3) $6 + 3 =$ _____

4) $5 + 7 =$ _____

5) $6 + 1 =$ _____

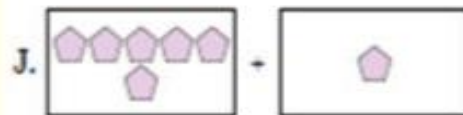
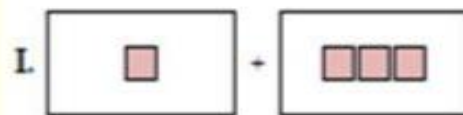
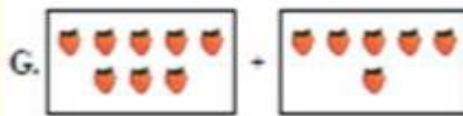
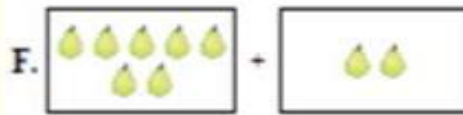
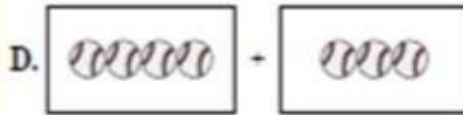

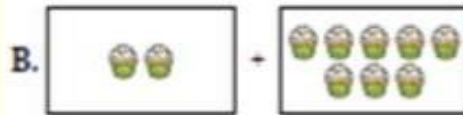
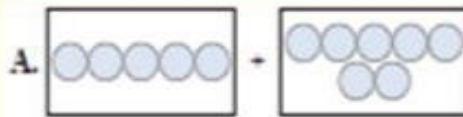
6) $1 + 3 =$ _____

7) $4 + 3 =$ _____

8) $7 + 2 =$ _____

9) $2 + 8 =$ _____

10) $4 + 9 =$ _____



1. _____

2. _____

3. _____

4. _____

5. _____

6. _____

7. _____

8. _____

9. _____

10. _____