

















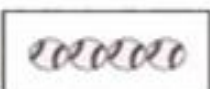
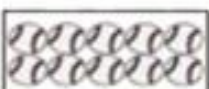


Addition Lesson-8 Name _____



- 1) Solve the addition problems listed below.
- 2) Place the letter of the correct photo next to the number .
- 3) Scan the QR code after you complete the page to see if you got it correct answers.

1) $4 + 10 =$ _____	A.  - 	1. _____
2) $3 + 8 =$ _____	B.  - 	2. _____
3) $4 + 2 =$ _____	C.  - 	3. _____
4) $7 + 1 =$ _____	D.  - 	4. _____
5) $2 + 5 =$ _____	E.  - 	5. _____
6) $2 + 10 =$ _____	F.  - 	6. _____
7) $5 + 8 =$ _____	G.  - 	7. _____
8) $2 + 3 =$ _____	H.  - 	8. _____
9) $9 + 7 =$ _____	I.  - 	9. _____
10) $9 + 1 =$ _____	J.  - 	10. _____