















# Addition with Objects

## Lesson - A



Addition Lesson-A Name \_\_\_\_\_

- 1) Solve the addition problems listed below.
- 2) Place the letter of the correct photo next to the number.
- 3) Scan the QR code after you complete the page to see if you got it correct answers.

E) $1 + 1 = \underline{2} \underline{G}$		+		G
1) $4 + 3 = \underline{\quad} \underline{\quad}$		+		A
2) $4 + 2 = \underline{\quad} \underline{\quad}$		+		B
3) $5 + 3 = \underline{\quad} \underline{\quad}$		+		C
4) $3 + 3 = \underline{\quad} \underline{\quad}$		+		D
5) $6 + 2 = \underline{\quad} \underline{\quad}$		+		E
6) $3 + 1 = \underline{\quad} \underline{\quad}$		+		F