





Addition Lesson - 15







Name _____



- 1) Solve the addition problems listed below.
- 2) Scan the QR code after you complete the page to see if you got it correct answers.

1)
$$\begin{array}{r} 4 \\ + 2 \\ \hline \end{array}$$
 


2)
$$\begin{array}{r} 5 \\ + 5 \\ \hline \end{array}$$
 


3)
$$\begin{array}{r} 6 \\ + 3 \\ \hline \end{array}$$
 


4)
$$\begin{array}{r} 7 \\ + 2 \\ \hline \end{array}$$
 


5)
$$\begin{array}{r} 10 \\ + 2 \\ \hline \end{array}$$
 


6)
$$\begin{array}{r} 10 \\ + 5 \\ \hline \end{array}$$
 