





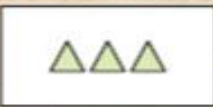





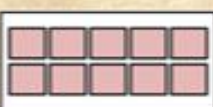
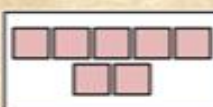








# Addition Lesson-9      Name \_\_\_\_\_



- 1) Solve the addition problems listed below.
- 2) Place the letter of the correct photo & total next to the number .
- 3) Scan the QR code after you complete the page.

1.  $10+7 = \underline{\quad}$
2.  $9+9 = \underline{\quad}$
3.  $7+6 = \underline{\quad}$
4.  $1+8 = \underline{\quad}$
5.  $10+10 = \underline{\quad}$
6.  $2+3 = \underline{\quad}$
7.  $10+9 = \underline{\quad}$
8.  $2+2 = \underline{\quad}$
9.  $3+1 = \underline{\quad}$
10.  $2+1 = \underline{\quad}$

A.		+	
B.		+	
C.		+	
D.		-	
E.		-	
F.		-	
G.		-	
H.		+	
I.		+	
J.		-	

1. \_\_\_\_\_
2. \_\_\_\_\_
3. \_\_\_\_\_
4. \_\_\_\_\_
5. \_\_\_\_\_
6. \_\_\_\_\_
7. \_\_\_\_\_
8. \_\_\_\_\_
9. \_\_\_\_\_
10. \_\_\_\_\_