

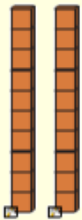
Place Value 0 - 49



Lesson 3 Place Value Name _____

1. Place the value of the number below each base ten block that is shown
2. When you are finished scan in the QR code to see if you are correct.

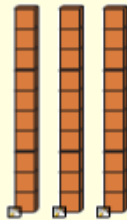
1)



Tens

Ones

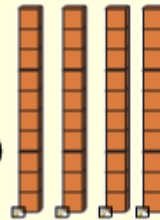
2)



Tens

Ones


3)



Tens

Ones

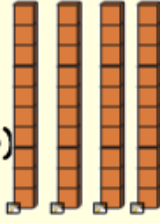
4)



Tens

Ones

5)



Tens

Ones

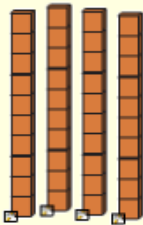
6)



Tens

Ones


7)



Tens

Ones

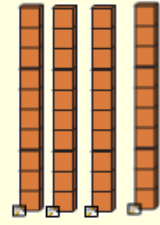
8)



Tens

Ones

9)



Tens

Ones