





Read the graphs and answer the following questions.

Problem 1

Use the tally chart to answer the questions.

What is Your Favorite Healthy Snack?		
Snack	Tally	Total
 Fruit		
 Nuts		
 Popcorn		

What snack is liked the least? _____

Vehicles Seen During a Trip		
Vehicle	Tally	Total
 Car		
 Motorcycle		
 Truck		
 Bus		

What vehicle was seen the most? _____

IMD1 video 1.docx

15 students were asked their favorite television show. Their answers were: series, cartoon, game show, reality show, reality show, cartoon, series, reality show, game show, cartoon, cartoon, game show, cartoon, cartoon, game show.

Problem 2

Record the answers in the tally chart. Write the totals.

Favorite Television Show		
Show	Tally	Total
Cartoon		
Game Show		
Reality Show		
Series		

Which type of show is the least favorite of the number of students? _____

Do more students like game shows or reality shows? _____




Extend Page

Read the graphs and answer the following questions.

Problem 3

Sally asks her friends to pick their favorite dessert. 4 people like cupcakes. 2 more people like cookies. The number of people that like ice cream is the same as the number that like cookies.


Complete the bar graph.

Favorite Dessert						
 Ice Cream						
 Cupcake						
 Cookie						
	1	2	3	4	5	6

Look at the pictures to interpret the data.

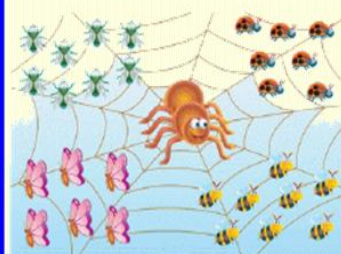
Problem 4

Count the ingredients.



Ingredient	How Many?
Chocolate Chip	
Cherry	
Egg	

How many more bees are there than butterflies? _____



Insects	How Many?
Spider	
Bee	
Fly	