


2MD1

Worksheet video 1 Name _____

Measure and Estimate lengths in standard units Problem 1




Measure about _____ inches



Measure the crayon to the nearest inch. _____


Measure and Estimate lengths in standard units Problem 2

Sandwich



Measure to the nearest inch _____

calculator



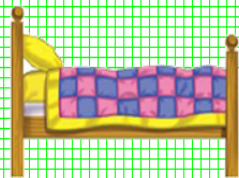
Measure to the nearest inch _____

Measure and Estimate lengths in standard units Problem 3



Which measurement would you use to determine the height of the Giraffe?

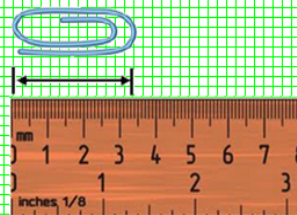
- a. inches b. feet
- c. minutes d. hours



Which tool would you use to determine the length of this object?

- a. meter stick
- b. centimeter ruler
- c. clock
- d. scale

Measure and Estimate lengths in standard units Problem 4



Measure the paper clip. Write to the nearest centimeter



Which is the best estimate for the length of an ant?

- a. 1 centimeter
- b. 30 centimeter
- c. 50 centimeter
- d. 1 meter