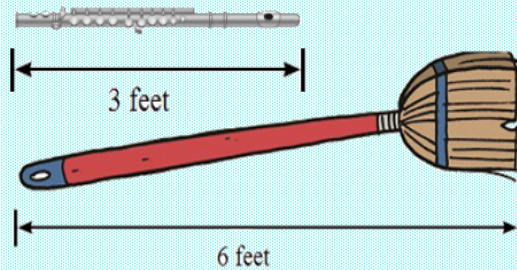


# 2MD4 Worksheet video 1 Name \_\_\_\_\_

Find the difference between the length of objects. Problem 1

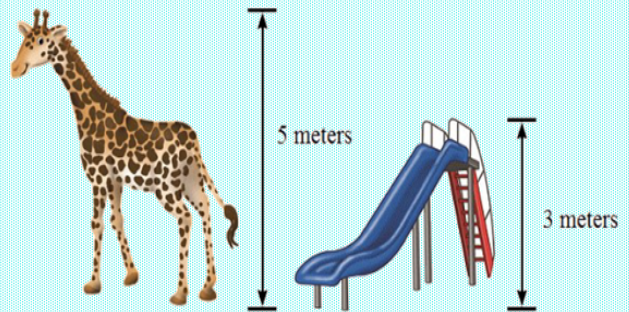


The broom is \_\_\_\_\_ feet. The flute is \_\_\_\_\_ feet.

Find the difference:

The broom is \_\_\_\_\_ feet \_\_\_\_\_.

Find the difference between the length of objects. Problem 2



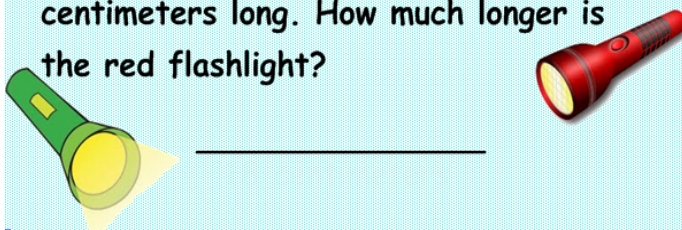
The slide is \_\_\_\_\_ meters. The giraffe is \_\_\_\_\_ meters.

Find the difference:

The slide is \_\_\_\_\_ meters \_\_\_\_\_.

Find the difference between the length of objects. Problem 3

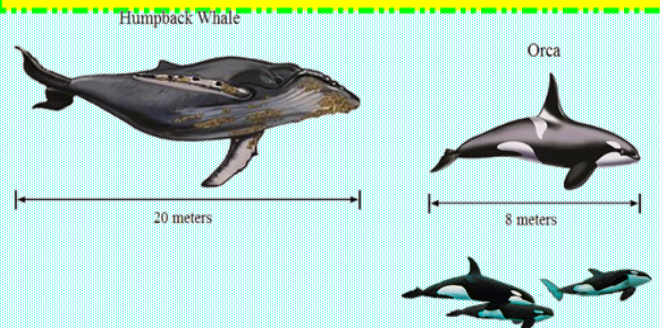
The red flashlight is 76 centimeters long. The green flashlight is 58 centimeters long. How much longer is the red flashlight?



A government building is 43 meters tall. The courthouse is 34 meters tall. How much taller is the government building?



Find the difference between the length of objects. Problem 4



The humpback whale is \_\_\_\_\_ meters. The orca is \_\_\_\_\_ meters.

The humpback whale is \_\_\_\_\_ meters \_\_\_\_\_.