

Problem 1: Solve the story problem.

Owen scored 15 points in his basketball game. The other players scored 12 points. What is the total score and who had the larger number.

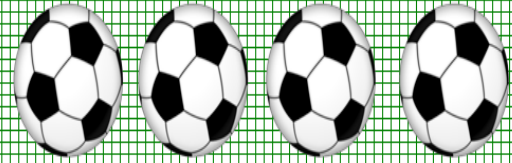


Owen

Other

Total
Points

$$\underline{\quad\quad} \bigcirc \underline{\quad\quad} = \underline{\quad\quad}$$




Problem 2 Solve the story problem.

Mrs. Withrow had all the 2nd graders vote on which sport they liked the best. 67 students chose soccer as their favorite sport. 19 students chose football as their favorite sport. How many students voted?

- A. 89 B. 85 C. 86 D. 96

Problem 3: Solve the story problem.




Joan had 42 grapes in a bowl. She ate 9 grapes. How many grapes are left in the bowl?

- A. 43 B. 33 C. 47 D. 34

Problem 4: Solve the story problem.

Julia counted 68 beads for an art project. Mrs. Jones wanted her to use 85 beads. How many more beads does Julia need?

Work space



_____ beads