

Use area to solve.

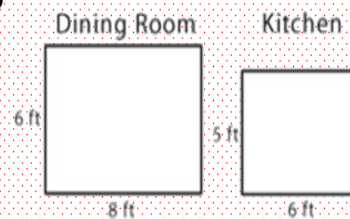
Problem 1

Annette's dad is putting blue tiles and red tiles on a table. The table is 3 feet by 4 feet. What area of the patio will he cover with blue tiles if he plans to use only 2 square feet of red tiles?

Use area to solve.

Problem 2

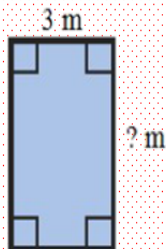
Tim's chore is to sweep the dining room and the kitchen. How much area does he sweep?



Use area to solve.

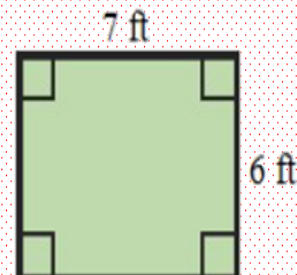
Problem 3

A diagram of a swimming pool is shown. If the area of the swimming pool is 21 square meters, what is the missing length of the swimming pool? Write an equation to solve.



Use area to solve.

Problem 4



The area is _____ square ft.