

**Problem 1**

Solve the two parts to problem 1 listed below.

Write the following  
number in standard  
form:

$$6000 + 900 + 20 + 8$$

Round 6824.8759  
to the nearest  
tenths place.

**Problem 2**

Solve the two parts to this problem listed below.

What is six thousand four  
hundred and thirty-two  
hundredths in standard  
form?

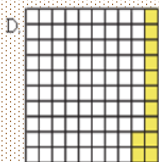
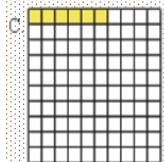

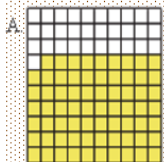
Which value is 378.937  
rounded to the nearest  
tens place?

a. 380    b. 378.9

c. 400    d. 378.94

**Problem 3**

Write the decimal number and the letter from the  
order smallest to largest.



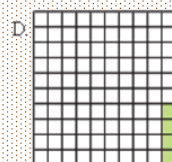
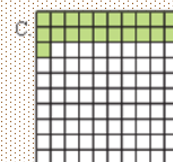
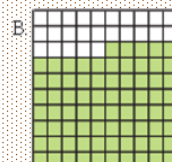
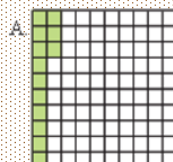
**ANSWER**

Smallest \_\_\_\_\_  
\_\_\_\_\_  
\_\_\_\_\_  
Largest \_\_\_\_\_  
\_\_\_\_\_  
\_\_\_\_\_

[Extend Page](#)

**Problem 4**

Write the decimal number and the letter from the  
order smallest to largest.



**ANSWER**

Smallest \_\_\_\_\_  
\_\_\_\_\_  
\_\_\_\_\_  
Largest \_\_\_\_\_  
\_\_\_\_\_  
\_\_\_\_\_

[Extend Page](#)