

# KOA2 Worksheet video 1 Name \_\_\_\_\_

**K.OA.2**


Problem 1

When told to please pick up a pen and write the answers to solve the following question.


0 1 2 3 4 5 6 7 8 9 10 11 12 13 14 15 16 17 18 19 20

Use cubes to model joining groups. Write the number that tells how many in all.

3



2



\_\_\_\_\_  
\_\_\_\_\_  
\_\_\_\_\_ in all

**K.OA.2**

Problem 2


When told to please pick up a pen and write the answers to solve the following question.

0 1 2 3 4 5 6 7 8 9 10 11 12 13 14 15 16 17 18 19 20


Listen to the story. Use cubes to model joining groups. Write the number that tells how many in all.

Amy has 3 goldfish. Jenn has 3 goldfish.  
How many good fish are there in all?

3



3



\_\_\_\_\_  
\_\_\_\_\_  
\_\_\_\_\_ in all

**K.OA.2**

Problem 3

When told to please pick up a pen and write the answers to solve the following question.

0 1 2 3 4 5 6 7 8 9 10 11 12 13 14 15 16 17 18 19 20

Write the number that tells how many Lady bugs in all.

3



4



\_\_\_\_\_  
\_\_\_\_\_  
\_\_\_\_\_ in all


**K.OA.2**

Problem 4


When told to please pick up a pen and write the answers to solve the following question.

0 1 2 3 4 5 6 7 8 9 10 11 12 13 14 15 16 17 18 19 20

Write the numbers and trace the symbols.  
Write how many there are in all.



\_\_\_\_\_  
\_\_\_\_\_  
\_\_\_\_\_



\_\_\_\_\_  
\_\_\_\_\_  
\_\_\_\_\_

+

=

\_\_\_\_\_  
\_\_\_\_\_  
\_\_\_\_\_