



MARVELOUS MATH





First Grade Standards:

Number & Operations in Base Ten

Understand place value.

1.NBT.B.3 Compare two two-digit numbers based on meanings of the tens and ones digits, recording the results of comparisons with the symbols $>$, $=$, and $<$.

I can tell the number which is less than.

I can tell the number which is greater than.

I can tell when numbers are equal, or the same.

Comparing Numbers

Mr. Alligator is hungry for lunch,
Find the biggest number and
Munch! Munch! Munch

$$6 < 9$$

Less Than

$$2 = 2$$



Equal

$$9 > 6$$

Greater Than



The open
mouth faces
the greatest
number.



greater than

$$8 > 3$$



7 is less
than 10



less than

$$7 < 10$$

8 is
greater
than 3

equal to =

$$5 = 5$$

same
amount

$$6 + 4 = 9 + 1$$

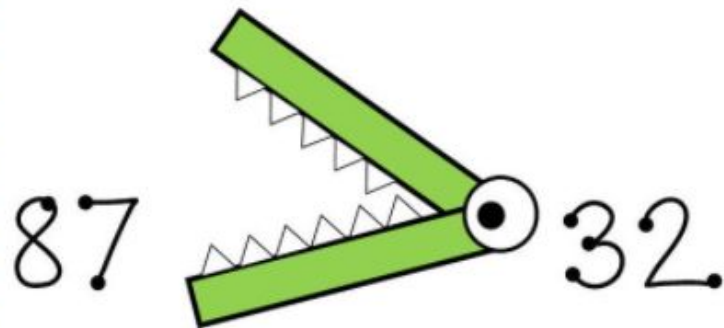
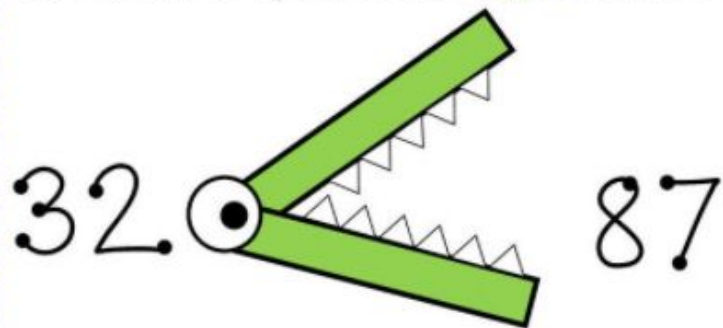
(Click on the image for a hotlink.)

Ready for a Brain Pop
Jr. on Comparing
Numbers? Let's listen
and learn!



Al Gator

Al Gator is hungry for the **greater** number.
His mouth is open to the **bigger** number.



Name _____

Comparing Numbers I

Circle $>$, $<$, or $=$ to compare the numbers



71 $>$ 42
 $<$
=

92 $>$ 29
 $<$
=

16 $>$ 61
 $<$
=

18 $>$ 18
 $<$
=


37 $>$ 39
 $<$
=

68 $>$ 24
 $<$
=

25 $>$ 25
 $<$
=

34 $>$ 87
 $<$
=

(Click on the image for a hotlink.)





Name _____


Comparing Numbers 4


Write a number in the box to make the sentence true





<input type="text"/>		97
----------------------	---	----


40		<input type="text"/>
----	---	----------------------


<input type="text"/>		79
----------------------	---	----

<input type="text"/>		39
----------------------	---	----


42		<input type="text"/>
----	---	----------------------

18		<input type="text"/>
----	---	----------------------

<input type="text"/>		12
----------------------	--	----

46		<input type="text"/>
----	--	----------------------

(Click on the image for a hotlink.)



Welcome to Canvas!

Choose the correct symbol by dragging it between the two two-digit numbers.

95		87
----	--	----

38		98
----	--	----

30		30
----	--	----

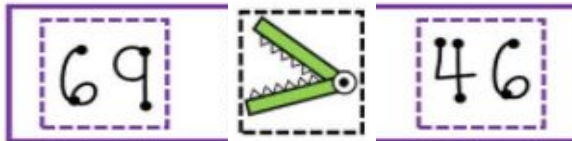
56		85
----	--	----

58		58
----	--	----

69		46
----	--	----



Check your
amazing
thinking here!



You
Rock

Comparing Numbers

Mr. Alligator is hungry for lunch,
Find the biggest number and
Munch! Munch! Munch

$$6 < 9$$

Less Than

$$2 = 2$$



Equal

$$9 > 6$$

Greater Than



The open
mouth faces
the greatest
number.



Great Job Comparing Numbers First Grade Friends!

Let's finish today with some GoNoodle!

(Click on the image for a hotlink.)

