

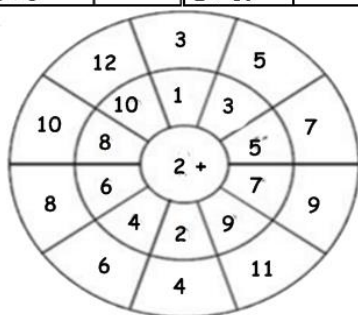
# LESSON – 1 CIRCLE ADDITION NAME \_\_\_\_\_

Directions: Click on the blue button for the video. Look at the circle for each problem, **only** if you need help in doing the math. Please write the correct answers in the space provided for each problem.



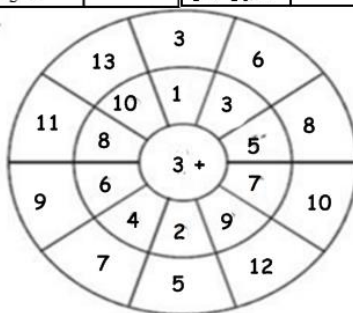
## Addition by 2

$2 + 1 =$		$2 + 6 =$	
$2 + 2 =$		$2 + 7 =$	
$2 + 3 =$		$2 + 8 =$	
$2 + 4 =$		$2 + 9 =$	
$2 + 5 =$		$2 + 10 =$	



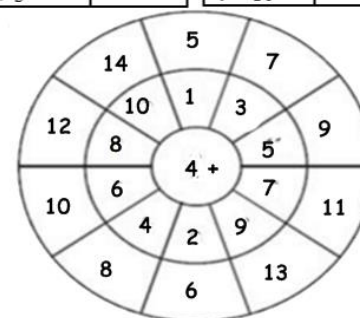
## Addition by 3

$3 + 1 =$		$3 + 6 =$	
$3 + 2 =$		$3 + 7 =$	
$3 + 3 =$		$3 + 8 =$	
$3 + 4 =$		$3 + 9 =$	
$3 + 5 =$		$3 + 10 =$	



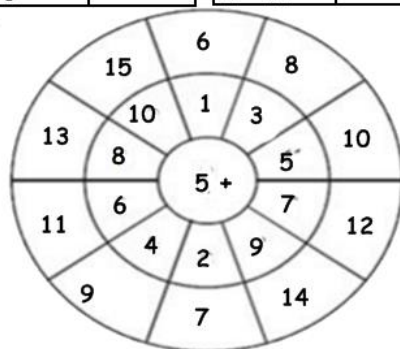
## Addition by 4

$4 + 1 =$		$4 + 6 =$	
$4 + 2 =$		$4 + 7 =$	
$4 + 3 =$		$4 + 8 =$	
$4 + 4 =$		$4 + 9 =$	
$4 + 5 =$		$4 + 10 =$	



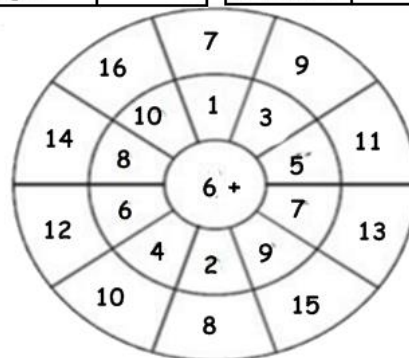
## Addition by 5

$5 + 1 =$		$5 + 6 =$	
$5 + 2 =$		$5 + 7 =$	
$5 + 3 =$		$5 + 8 =$	
$5 + 4 =$		$5 + 9 =$	
$5 + 5 =$		$5 + 10 =$	



## Addition by 6

$6 + 1 =$		$6 + 6 =$	
$6 + 2 =$		$6 + 7 =$	
$6 + 3 =$		$6 + 8 =$	
$6 + 4 =$		$6 + 9 =$	
$6 + 5 =$		$6 + 10 =$	



## Addition by 7

$7 + 1 =$		$7 + 6 =$	
$7 + 2 =$		$7 + 7 =$	
$7 + 3 =$		$7 + 8 =$	
$7 + 4 =$		$7 + 9 =$	
$7 + 5 =$		$7 + 10 =$	

