










LESSON 1 MATH PICTURE PUZZLE NAME \_\_\_\_\_






*Directions: In the space provided place the value of each object. You may click on the video to provide you with the answers*










Working area




**A**

			2
			4
			3
3	1	5	










	<input style="width: 50px; height: 30px;" type="text"/>
	<input style="width: 50px; height: 30px;" type="text"/>
	<input style="width: 50px; height: 30px;" type="text"/>




**B**

			6
			4
			6
7	3	6	










	<input style="width: 50px; height: 30px;" type="text"/>
	<input style="width: 50px; height: 30px;" type="text"/>
	<input style="width: 50px; height: 30px;" type="text"/>




**C**

			4
			6
			8
5	7	6	

	<input style="width: 50px; height: 30px;" type="text"/>
	<input style="width: 50px; height: 30px;" type="text"/>
	<input style="width: 50px; height: 30px;" type="text"/>

**D**

			7
			5
			7
6	4	9	

	<input style="width: 50px; height: 30px;" type="text"/>
	<input style="width: 50px; height: 30px;" type="text"/>
	<input style="width: 50px; height: 30px;" type="text"/>