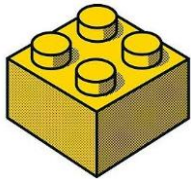


Number Picture Puzzles

Use your background knowledge to determine what the missing numbers are and solve the final equations!

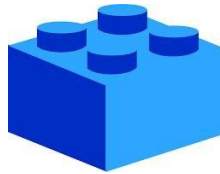
 \times

4

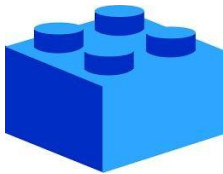
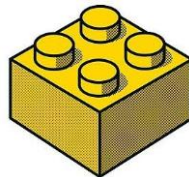
 $=$

24

7

 \times  $=$

21

 \times  $=$

5

 \times  $=$

35

 \times

5

 $=$

45

 \times  $=$

Number Picture Puzzles

Use your background knowledge to determine what the missing numbers are and solve the final equations!



X

6

=

12

4

X



=

20



X



=

10

X



=

70



X

2

=

16



X



=
