





NAME _____

MATH PICTURE PUZZLES Directions: determine the answer for each picture puzzle place in the space provided.

A



1.)  +  = 14

2.)  +  = 20

3.)  +  = _____

Write your answers on your sheet

B

1.)  +  = 10

2.)  +  = 6



3.)  +  = _____

Write your answers on your

C

1.)  +  = 16



2.)  +  = 11

3.)  +  = _____

Write your answers on your

D

1.)  +  = 14

2.)  +  = 13

3.)  +  = _____

Write your answers on your