







NAME _____ Lesson E







MATH PICTURE PUZZLES Directions: determine the answer for each picture puzzle place in the space provided. You must look carefully at each picture to determine the correct answer!

A

- 1.)  +  = 6
- 2.)  +  = 7
- 3.)  +  = _____


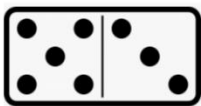



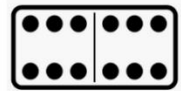
Write your answers on your

B

- 1.)  +  = 12
- 2.)  +  = 9
- 3.)  +  = _____

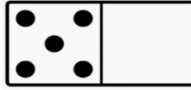
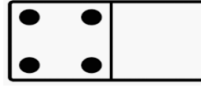

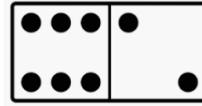
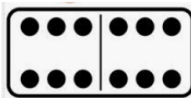
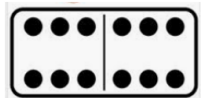
Write your answers on your

C

- 1.)  +  = 18
- 2.)  +  = 20
- 3.)  +  = _____

Write your answers on your

D

- 1.)  +  = 9
- 2.)  +  = 20
- 3.)  +  = _____

Write your answers on your