

LESSON 2 VOLUME

NAME _____



Directions: Find the length, width and height of the rectangular prism. Then calculate the VOLUME. Place all calculations in the spaces provided.

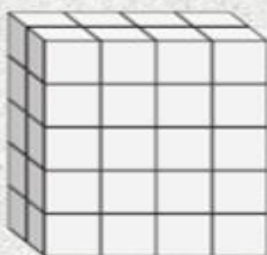
Scan the QR Code to check your answers.

1)



L W H V
2 3 3 18

2)



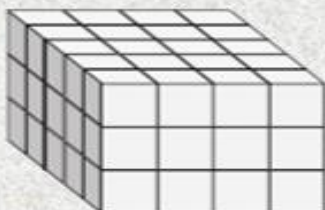
L W H V

3)



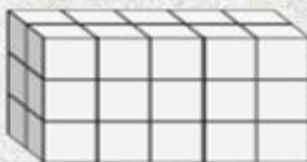
L W H V

4)



L W H V

5)



L W H V

6)



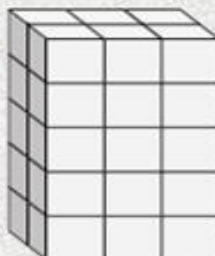
L W H V

7)



L W H V

8)



L W H V

9)



L W H V
