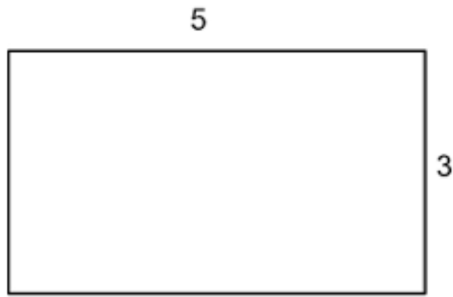


# Area and Perimeter L - 1

Date: \_\_\_\_\_


Name: \_\_\_\_\_

1. What is the area of a 5 x 3 rectangle?



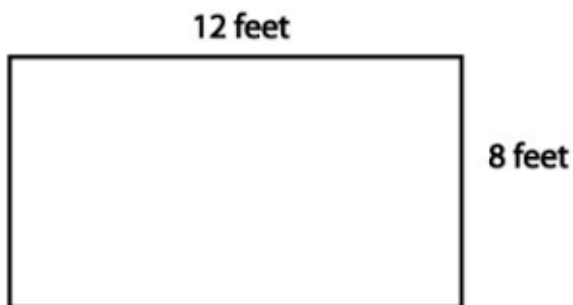
- A  8                      B  13  
C  15                      D  16

2. What is the perimeter of a 10 x 3 rectangle?




- A  8                      B  13  
C  15                      D  26

3. What is the area of a 12 x 8 rectangle?



- A  20                      B  40  
C  84                      D  96

4. What is the perimeter of a 12 x 8 rectangle?



- A  20                      B  40  
C  84                      D  96

5. Challenge: a rectangle has a perimeter of 36 feet. It is twice as long as it is wide. What are the dimensions of the rectangle?

- A  4 x 8    B  6 x 12    C  3 x 12  
D  8 x 4    E  12 x 3    F  12 x 6