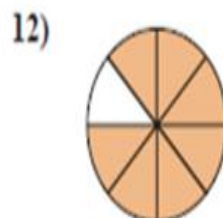
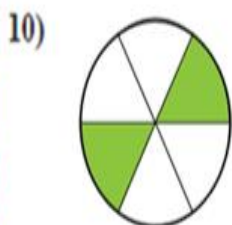

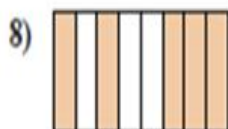
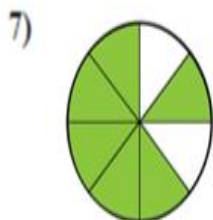


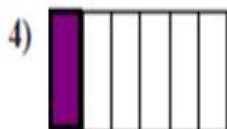


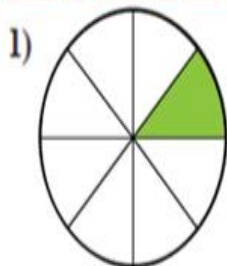


Naming Fractions

Naming Fractions Lesson 4 Name _____

1. Which letter that best describes the shaded portion.
2. When you're done scan in the QR code at the bottom.



[Extend Page](#)

1. _____

2. _____

3. _____

4. _____

5. _____

6. _____

7. _____

8. _____

9. _____

10. _____

11. _____

12. _____