







Multiplication 1 digit Name _____

- 1) Complete all 9 addition problems.
- 2) Show your work in the space provided.
- 3) Scan the QR code after you complete each answer to see if you got it correct.
- 4) Shade the small circle if you are correct. If not leave it blank.

$\begin{array}{r} 32 \\ \times 8 \\ \hline \end{array}$  <input type="radio"/>	$\begin{array}{r} 22 \\ \times 8 \\ \hline \end{array}$  <input type="radio"/>	$\begin{array}{r} 47 \\ \times 7 \\ \hline \end{array}$  <input type="radio"/>
$\begin{array}{r} 49 \\ \times 5 \\ \hline \end{array}$  <input type="radio"/>	$\begin{array}{r} 89 \\ \times 6 \\ \hline \end{array}$  <input type="radio"/>	$\begin{array}{r} 58 \\ \times 8 \\ \hline \end{array}$  <input type="radio"/>
$\begin{array}{r} 10 \\ \times 8 \\ \hline \end{array}$  <input type="radio"/>	$\begin{array}{r} 55 \\ \times 3 \\ \hline \end{array}$  <input type="radio"/>	$\begin{array}{r} 64 \\ \times 6 \\ \hline \end{array}$  <input type="radio"/>