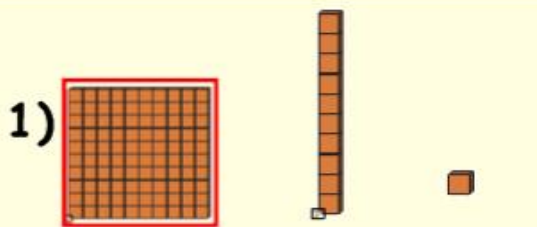


# Place Value 100 - 400



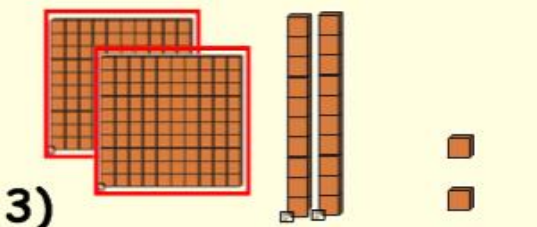
Lesson 5 Place Value Name \_\_\_\_\_

1. Place the value of the number below each base ten block that is shown
2. When you are finished scan in the QR code to see if you are correct.



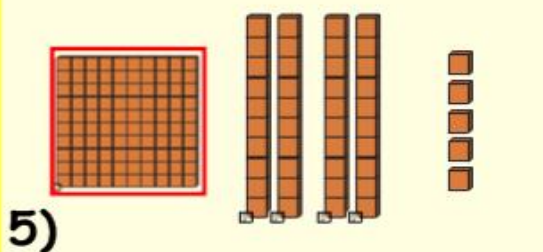
\_\_\_\_\_

Hundred Tens Ones



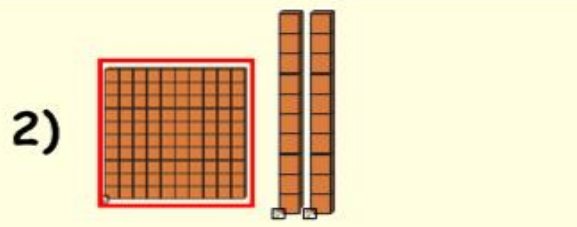
\_\_\_\_\_

Hundred Tens Ones



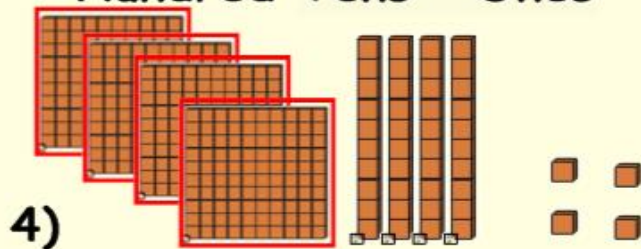
\_\_\_\_\_

Hundred Tens Ones



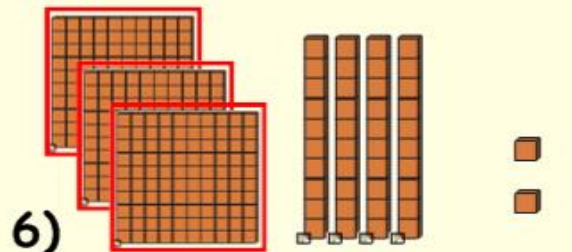
\_\_\_\_\_

Hundred Tens Ones



\_\_\_\_\_

Hundred Tens Ones



\_\_\_\_\_

Hundred Tens Ones